













TIME 2

Match the times shown on the clocks to the times written words. Put them in order. You will be able to solve the puzzle more easily if you cut out the cards on pages 2 and 3 and match them.

You could also use the cards on page 4 and match the 36 cards into 12 sets of 3 cards.

Pick 3 of the times, perhaps your favourite times of day. Make up a story about what happens at those times.

1 	2 	3 	A Twenty five to twelve	B Seven o'clock	C Quarter past five
4 	5 	6 	D Twenty past twelve	E Half past nine	F Ten to six
7 	8 	9 	G Quarter to eleven	H Twenty five past one	I Five past four
10 	11 	12 	J Ten past three	K Five to two	L Twenty to eight

Help

The short hand on the clock face points to the hour and the long hand points to the minutes.

So clock 1 shows that the time is between 9 o'clock and 10 o'clock and it also shows 30 minutes so we can say that the time is 9.30.


Also we know that there are 60 minutes in an hour so there are 30 minutes in half an hour and 15 minutes in a quarter of an hour. So we can say 9.30 or half past nine and we can match the picture of the clock number 1 with card E. Now can you match the other cards?

Extension

Think of a journey that you do often and think about the time it takes.

It might be your journey to school if that is a long one, or it might be a journey to another town to go shopping or to visit relatives or friends. If you are not sure of how long the journey takes perhaps you can ask people that you go with.

Then write a short story about the journey including the times, or draw some pictures of the journey including pictures of clocks showing the times.



Half past nine	Five to two	Quarter past five
Quarter to eleven	Five past four	Twenty-five to twelve
Twenty to eight	Twenty past twelve	Ten past three
Ten to six	Seven o'clock	Twenty-five past one

Times as shown on the 12 hour clock

O 5.50	P 5.15	Q 11.35
R 12.20	S 4.05	T 10.45
U 1.25	V 7.40	W 3.10
X 1.55	Y 7.00	Z 9.30